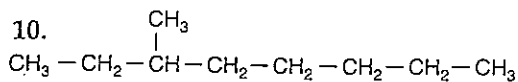
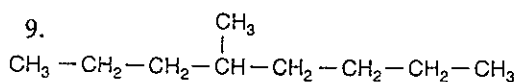
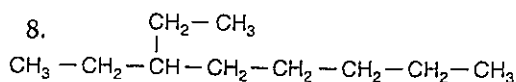
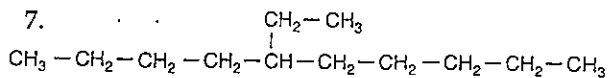
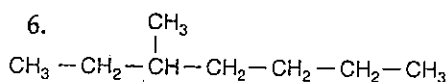
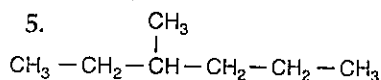
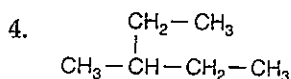
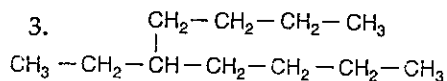
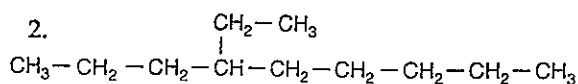
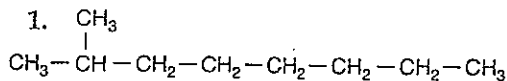


25-4 Practice Problems

Give the IUPAC name for the following molecules:



Write condensed structural formulas for the following:

11. 4-methyloctane

12. 4-ethyldecane

13. 3-ethylpentane

14. 3-ethylhexane

15. 5-butyldecane

16. 4-ethylheptane

17. 3-methylnonane

18. 2-methylheptane

19. 4-propylheptane

20. 5-butylnonane