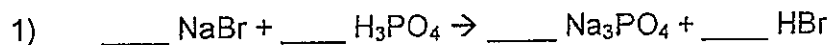


Types of Reactions Worksheet

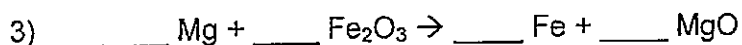
Balance the following equations and indicate the type of reaction taking place:



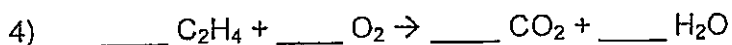
Type of reaction: _____



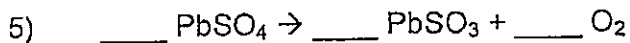
Type of reaction: _____



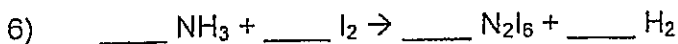
Type of reaction: _____



Type of reaction: _____



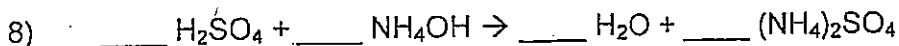
Type of reaction: _____



Type of reaction: _____



Type of reaction: _____



Type of reaction: _____